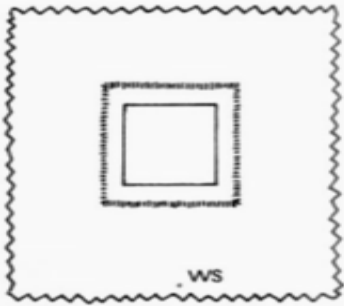

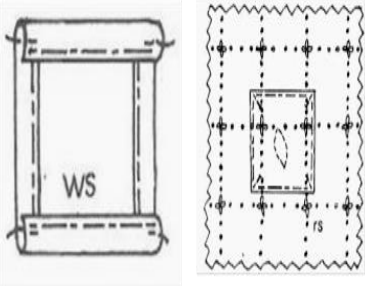
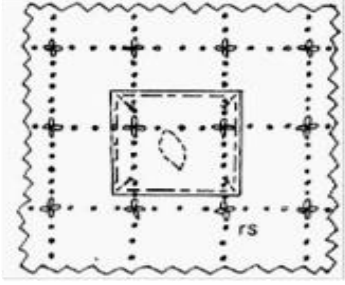
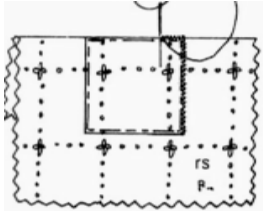


You can answer on this paper if you have printed this worksheet and paste it in your exercise book or answer in your exercise book or activity book by writing down both questions and answers.

Short Answer Questions

(10 marks)

- (a) State **one** advantage of using a commercial pattern. **(1 mark)**
- (b) Name one part of a garment where a **one-pointed** dart is used. **(1 mark)**
- (c) The steps in pictures of making a print patch given below are not in their correct order. **Rearrange** them in their correct order by writing the numbers of the steps in the spaces given in the **Answer Booklet**. The **fourth** step is done for you.

Step 1		Step 3	
Step 2		Step 4	
Step 5			

(4 marks)

- (d) Differentiate between **temporary stitches** and **permanent stitches**. **(2 marks)**
- (e) Explain the term disposal of fullness. **(2 marks)**

THE END